

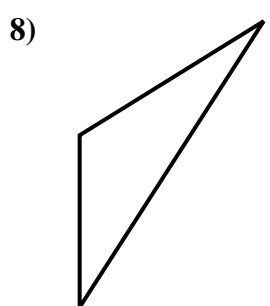
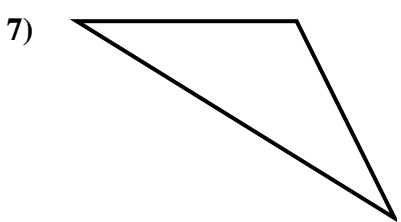
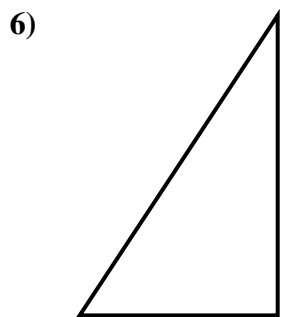
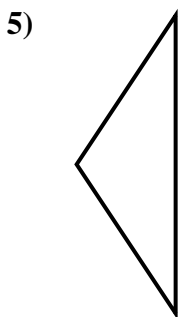
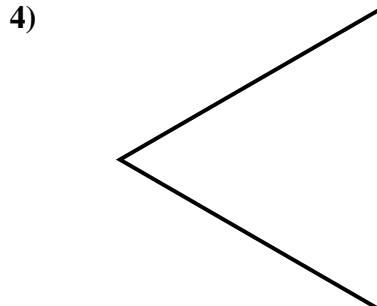
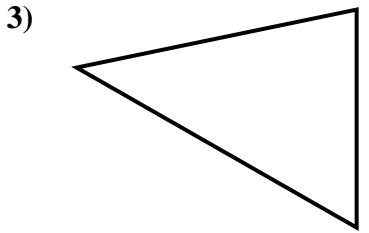
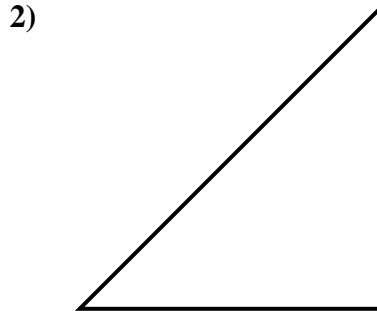
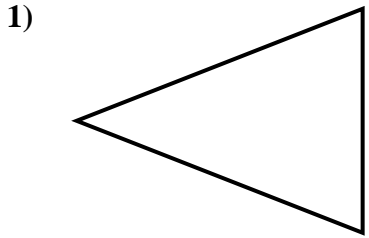


Determine if each triangle is acute(A), obtuse(O) or right(R) and if it is an equilateral(E), isosceles(I) or scalene(S).

Answers

<p><b>Acute Triangle:</b> All angles are less than <math>90^\circ</math>.</p> <p><b>Obtuse Triangle:</b> One angle is greater than <math>90^\circ</math>.</p> <p><b>Right Triangle:</b> One angle is <math>90^\circ</math>.</p>	<p><b>Equilateral Triangle:</b> 3 equal sides. 3 equal angles.</p> <p><b>Isosceles Triangle:</b> 2 equal sides. 2 equal angles.</p> <p><b>Scalene Triangle:</b> No equal sides. No equal angles.</p>
---	--

1. \_\_\_\_\_
2. \_\_\_\_\_
3. \_\_\_\_\_
4. \_\_\_\_\_
5. \_\_\_\_\_
6. \_\_\_\_\_
7. \_\_\_\_\_
8. \_\_\_\_\_

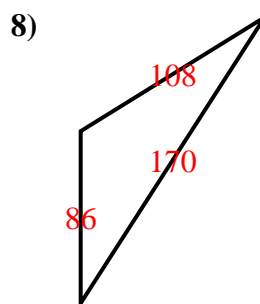
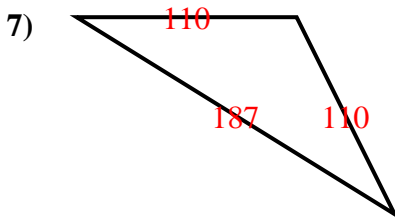
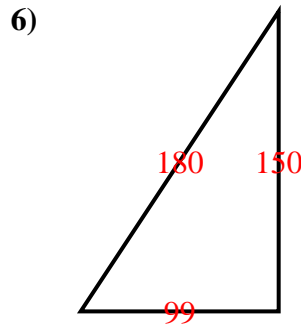
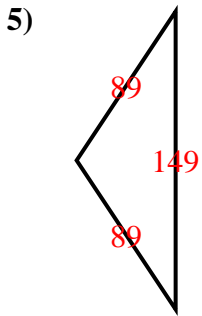
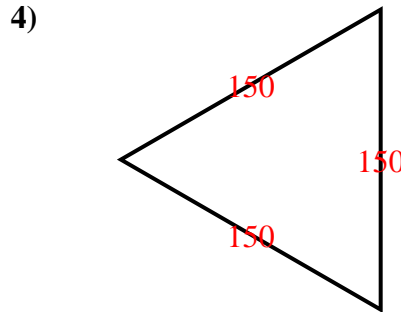
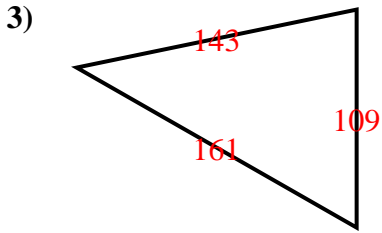
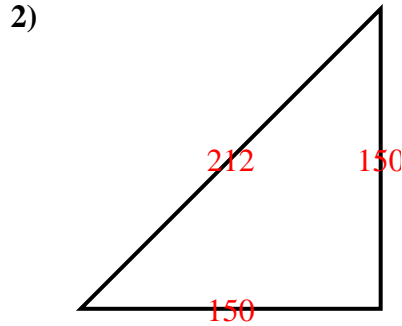
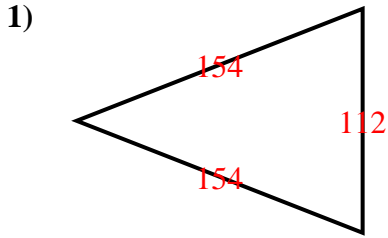




Determine if each triangle is acute(A), obtuse(O) or right(R) and if it is an equilateral(E), isosceles(I) or scalene(S).

Answers

<p><b>Acute Triangle:</b> All angles are less than <math>90^\circ</math>.</p> <p><b>Obtuse Triangle:</b> One angle is greater than <math>90^\circ</math>.</p> <p><b>Right Triangle:</b> One angle is <math>90^\circ</math>.</p>	<p><b>Equilateral Triangle:</b> 3 equal sides. 3 equal angles.</p> <p><b>Isosceles Triangle:</b> 2 equal sides. 2 equal angles.</p> <p><b>Scalene Triangle:</b> No equal sides. No equal angles.</p>
---	--



1. AI
2. RI
3. AS
4. AE
5. OI
6. RS
7. OI
8. OS